



VIDYA DEVI JINDAL SCHOOL, HISAR
Aptitude Assessment For Admission (2024-25)
Class-IV
Sample Paper

Subject: English

Time: 30 Minutes

Maximum Marks: 20

SECTION - 'A' (READING)

1. Read the passage given below and answer the questions that follow: 7 marks

People drink a lot of tea. There are many kinds of tea. There is black tea. There is green tea. There is white tea. There is red tea. There is yellow tea. People drink a lot of tea in China. Some people drink it because it is good for them. It makes them healthy. Other people drink it because it tastes very good. It tastes delicious. People drink a lot of green tea in Japan. People drink a lot of green tea in Korea too. In Vietnam, some people drink coffee before they drink tea. People drink a lot of tea in England. Every afternoon, English people drink tea. English people add milk to their tea. Finally, many people drink tea in the U.S. In the South, people drink 'sweet tea'. Sweet tea is cold black tea with sugar. Most tea comes from China. Some tea comes from India or Sri Lanka. Kenya, Japan, and Indonesia also grow a lot of tea.

- | | |
|---|---|
| i. Which country is known for drinking a lot of green tea? | 1 |
| a. China b. Japan c. England d. USA | |
| ii. What is the main reason of people drinking tea in China? | 1 |
| a. flavor b. tradition c. health benefits d. refreshment | |
| iii. What type of tea is often consumed with milk in England? | 1 |
| a. Green tea b. Red tea c. Black tea d. White tea | |
| iv. What is 'sweet tea' in the Southern United States? | 1 |
| a. Tea with honey b. Tea with milk c. Cold black tea with sugar d. Herbal tea with sweetener | |
| v. Why do people in China drink a lot of tea? | 1 |

- | | |
|--|---|
| vi. Write the cultural significance of tea consumption in England. | 1 |
|--|---|

- | | |
|--|---|
| vii. Find the opposite of the following word from the passage.
healthy | 1 |
|--|---|

SECTION –‘B’ (WRITING)

2. Write a paragraph on ‘Save Tree’ in about 80-100 words.

5

SECTION-‘C’ (GRAMMAR)

10 x0.5 = 5

3. Do as directed.

i. Underline the pronoun in the sentence.

0.5

He is bringing his guitar to the party tonight.

ii. Identify the type of noun of the underlined word.

0.5

A bouquet of flowers brightened up the room.

iii. Fill in the blank with the correct degree of adjective in the bracket.

0.5

The volleyball captain is _____ than the other players in the team. (tall)

iv. Which word in this sentence is a proper noun?

0.5

London is a city with a rich culture.

v. Fill in the blank with the appropriate preposition.

0.5

The plane is flying _____ the mountains. (under/ above)

vi. Fill in the blank with a, an, or the.

0.5

I saw _____ movie you recommended.

vii. Fill in the blank with the appropriate pronoun.

0.5

While playing basketball, I hurt _____. (myself/ themselves)

viii. Identify the verb in the following sentence.

0.5

He painted a beautiful picture.

ix. Choose the correct option from the bracket. 0.5
He is stronger than he was last year. (comparative/superlative)

x. Fill in the blank with the correct form of verb. 0.5
Bernie _____ a meeting yesterday. (have/ has/ had)

4. Rearrange the following words into meaningful sentences using correct punctuation. 3x1=3

i. shoes / I wear / comfortable

ii. often go / We / library / to the

iii. sandwiches / for breakfast / eat / They

SUBJECT: MATHEMATICS

Time Allowed: 30 minutes

Maximum Marks: 20

Attempt all the questions:

1. What should come in the blank? $358 = 3\text{hundred} + \underline{\hspace{2cm}} + 8\text{ones}$ (1 mark)

2. Find the missing number. (1 mark)

$$\begin{array}{r} 35 \\ + \square \\ \hline 56 \end{array}$$

3. You went to market and purchased a pair of shoes for Rs. 7299. Write the amount in words. (1 mark)






4. What is the quotient of place value of and face value of 3 in 936? (1 mark)

5. (i) Convert Rs. 6.50 into paise _____

(ii) Convert 925 paise into Rs. _____ (2 marks)

6. A milkman sells 39 litres of milk in a day. How many litres of milk will he sell in a week? (2 marks)

7. A school has 678 students. 34 students left the school. Later, 349 new students joined the school.
What will be the total number of students in the school now? **(3 marks)**
8. Arrange in column and multiply 865 by 97. **(3 Marks)**
9. Subtract the sum of 24 & 56 from the sum of 78 & 95. **(3 Marks)**
10. Read the pictograph given below and answer the questions: **(3 marks)**

Car Color	Number of cars	
Red Car 	16	(i)
Green Car 	12	(ii)
Blue Car 	5	(iii)
Black Car 	4	(iv)
Orange Car 	13	(v)

- (i) How many more red cars were produced green car? _____
- (ii) Which colour cars were produced as even numbers in quantity? _____
- (iii) Total how many black and blue cars were produced? _____