

VIDYA DEVI JINDAL SCHOOL, HISAR
Aptitude Assessment for Admission (2025-26)
SAMPLE PAPER

Class: IV



Name of the Student: _____

Father's Name: _____

Mother's Name: _____

Registration No. : _____

Observer's Signature _____

Subject: English

Time Allowed: 30 minutes
Attempt all the questions:

Maximum Marks: 20

SECTION - 'A' (READING)

1. **Read the passage given below carefully.**

7x1=7

I am thrilled that May is finally here! Now I can enjoy what I call “the sweet taste of summer”! Watermelons are in the stores, and I plan to eat one every day for the next three months. I think watermelons taste better than any other fruit. Peaches, plums, and strawberries are also great in the summer. I enjoy eating those, too. But they just don’t taste as good to me as a sweet watermelon. My whole family likes eating watermelons. We ate at least three watermelons a week last year. This year, I am going to eat watermelon every day, all summer long.

Based on the understanding of the above passage, answer the following questions.

- i. What is the author's plan for May and the following three months? 1
a. planting watermelons b. eating watermelons daily
c. going on a vacation d. avoiding watermelons
- ii. Why do watermelons taste better than other fruits in the summer? 1
a. They are juicier. b. They are cheaper. c. They are smaller. d They are colder.
- iii. What did the author's family do last year regarding watermelon? 1
a. ate watermelons every day b. ignored watermelons
c. ate three watermelons a week d. planted watermelons
- iv. What does the author refer to as “the sweet taste of summer”? 1
a. warm weather b. watermelon flavour
c. ice cream d. lemonade
- v. Why does the author prefer watermelons over other fruits in summer? 1
-
- vi. How does the author's enthusiasm for watermelons impact their summer plans and family? 1
-
- vii. Find a synonym for the word ‘**thrilled**’ as used in the passage. 1
-

SECTION – 'B' (WRITING)

2. Write a paragraph on ‘**If I were a Pencil**’ in about 80-100 words.

5 marks

SECTION-'C' (GRAMMAR)

10 x0.5 = 5

3. Do as directed.

i. Underline the pronoun in the sentence. 0.5
Murat is a good boy. He always listens to the teacher.

ii. Identify the type of noun of the underlined word. 0.5
The team celebrated their victory.

iii. Fill in the blank with the correct degree of adjective in the bracket. 0.5
The rose is _____ than the daisy. (beautiful)

iv. Which word in this sentence is a proper noun? 0.5
It is too hot and uncomfortable in the month of May.

v. Fill in the blank with the appropriate preposition given in the bracket. 0.5
The bird flew _____ the house. (under/ over)

vi. Fill in the blank with a, an, or the. 0.5
She is wearing _____ elegant dress.

vii. Fill in the blank with the appropriate pronoun. 0.5
The box was lying around. Is (it/its) yours?

viii. Identify the verb in the following sentence. 0.5
We cooked dinner together.

ix. Choose the correct option from the bracket. 0.5
She is the strongest girl; I have ever seen in school. (comparative/superlative)

x. Read the following sentence and use has/have/had appropriately. 0.5
Do you _____ Sam's contact number?

4. Rearrange the following words into meaningful sentences using correct punctuation. 3x1=3

i. peacock/a/beautiful/is/a/bird

ii. person/a/healthy/exercise/makes

iii. festival/Holi/the/colours/is/of _____

SUBJECT: MATHEMATICS

Time Allowed: 30 minutes

Maximum Marks: 20

Attempt all the questions:

1. Write as numerals: - Four thousand seven hundred fifty-three. _____ (1)
2. Rs. 9 = _____paise (1)
3. What is the sum of 350 and 4005? (1)

4. What is the sum of ones place digit and place value of 8 in 768? (1)

5. How much will be added to 900 to get 1500? (2)

6. Multiply 945 x 8. (2)

7. If the cost of 9 pencils is Rs. 927. What is the cost of 1 pencil? (3)

8. Write the difference between the face value and place value of 9 in 986. (3)







9. Sheela purchased two chocolates of cost Rs. 900 each. She gave Rs. 2000 note to the shopkeeper.
How much money shopkeeper returned to her? (3)

10. Study the following pictograph and answer the following questions: (3)

(i) In which city was the rainfall maximum?

(ii) In which city was the rainfall minimum?

(iii) Which city had rainfall of 75 cm?

City	Rainfall (in cm)	 = 50 cm rainfall
Mumbai	 	
Delhi		
Hyderabad	 	
Chennai	  	
Kolkata	